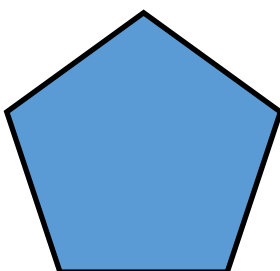

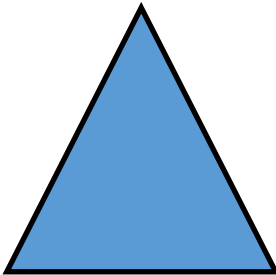
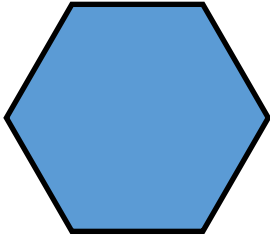


**Learning Challenge:**

Can you name 2D shapes?

Do you know the properties of 2D shapes?



Draw a line to match the shape to its properties and then name the shape.

This shape is a \_\_\_\_\_.

It has 4 sides.

It has 4 corners.

Can you draw a line of symmetry on this shape?

This shape is a \_\_\_\_\_.

It has 6 sides.

It has 6 corners.

Can you draw a line of symmetry on this shape?

This shape is a \_\_\_\_\_.

It has 1 side.

It has 0 corners.

Can you draw a line of symmetry on this shape?

This shape is a \_\_\_\_\_.

It has 5 sides.

It has 5 corners.

Can you draw a line of symmetry on this shape?

This shape is a \_\_\_\_\_.

It has 3 sides.

It has 3 corners.

Can you draw a line of symmetry on this shape?